

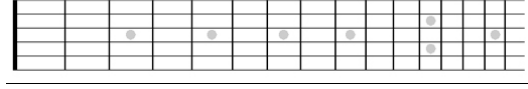
Guitar Notes and Frets Exercises

A. For each note, draw a dot on the correct string and fret.

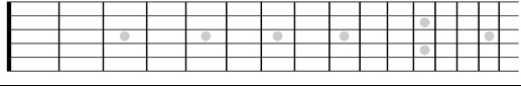
Bb



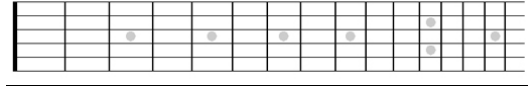
C



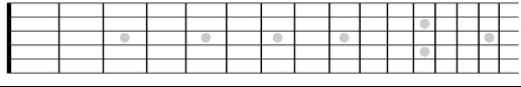
D



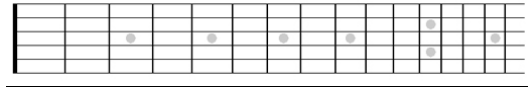
Eb



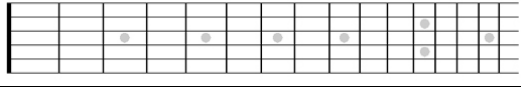
F



G




A



Bb (High)



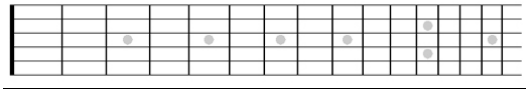
B. Give the letter name of the notes written on the staff.

Guitar  8

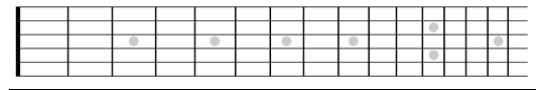
1. ____ 2. ____ 3. ____ 4. ____ 5. ____ 6. ____ 7. ____ 8. ____

C. Draw a dot on the correct string and fret for each note in Question B.

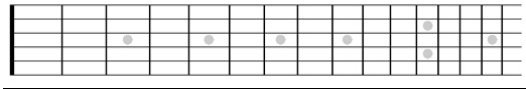
1.



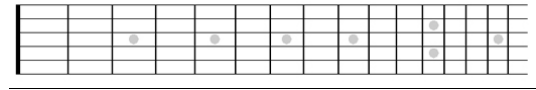
2.



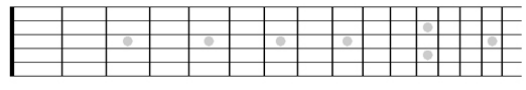
3.



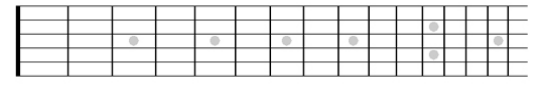
4.



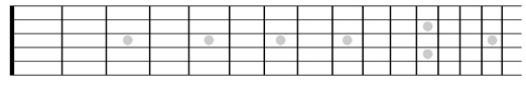
5.



6.



7.



8.

