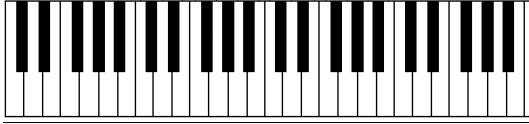


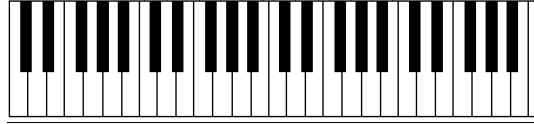
Piano Notes Exercises

A. For each note, draw a dot on the correct piano key.

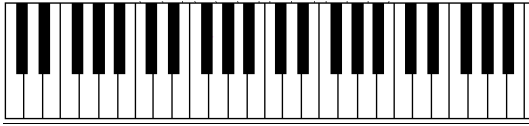
Bb



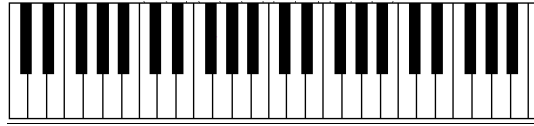
C



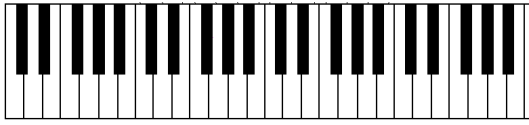
D



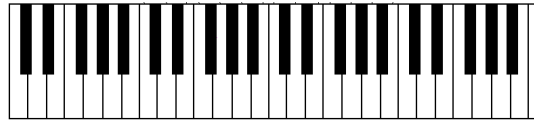
Eb



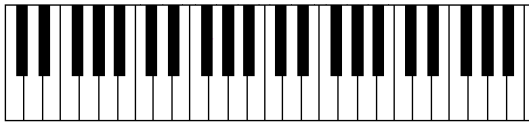
F



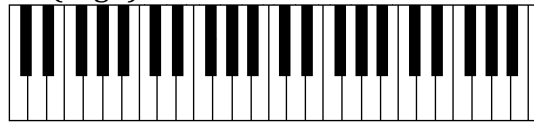
G



A



Bb (High)



B. Give the letter name of the notes written on the staff.



1. ___ 2. ___ 3. ___ 4. ___ 5. ___ 6. ___ 7. ___ 8. ___

C. Draw a dot on the piano key for each note in Question B.

