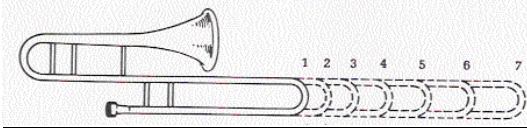


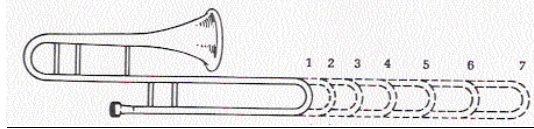
Trombone Notes and Slide Positions Exercises

A. For each note, shade in the correct slide position

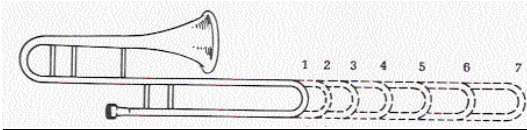
Bb



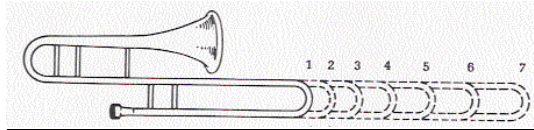
C



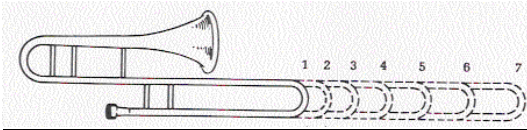
D



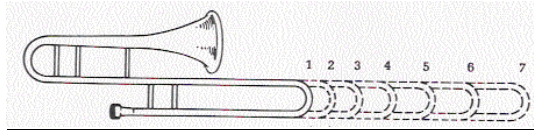
Eb



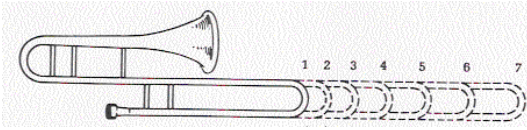
F



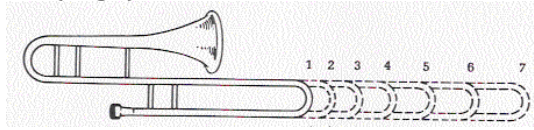
G



A



Bb (High)



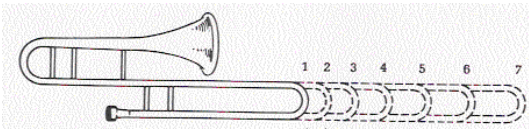
B. Give the letter name of the notes written on the staff.

Trombone 

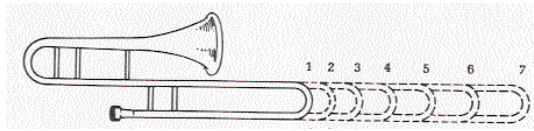
1. ___ 2. ___ 3. ___ 4. ___ 5. ___ 6. ___ 7. ___ 8. ___

C. Shade in the correct slide position for each note in Question B.

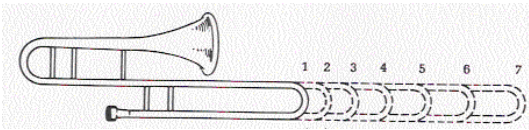
1.



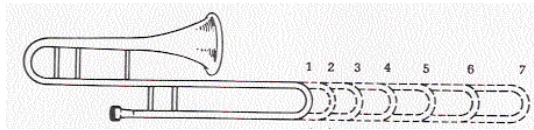
2.



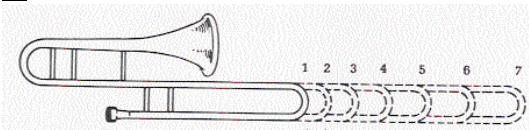
3.



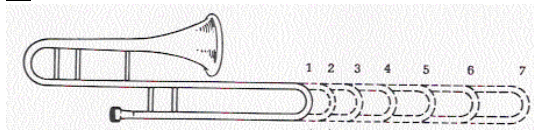
4.



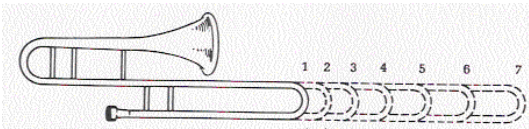
5.



6.



7.



8.

